


Coin Values

- Write the **value** on the coin.
- Write the **name** of the coin.

quarter	loonie	dime
nickel	penny	toonie



penny













COPYRIGHT © 2017 JUMP MATH: NOT TO BE COPIED

Counting Coins


Skip count by the coin value.




 5 ¢ 10 ¢ _____ ¢ _____ ¢ _____ ¢ _____ ¢ _____ ¢




 _____ ¢ _____ ¢ _____ ¢ _____ ¢ _____ ¢ _____ ¢ _____ ¢



 _____ ¢ _____ ¢ _____ ¢ _____ ¢ _____ ¢ _____ ¢ _____ ¢



 _____ ¢ _____ ¢ _____ ¢ _____ ¢ _____ ¢ _____ ¢ _____ ¢








 _____ ¢ _____ ¢ _____ ¢ _____ ¢

Bonus: Circle the greatest amount of money.

Count the money by the coin value.







5¢	5¢	5¢	1¢	1¢	1¢	18¢
<u>5</u> ¢	<u>10</u> ¢	<u>15</u> ¢	<u>16</u> ¢	<u>17</u> ¢	<u>18</u> ¢	

10¢	10¢	10¢	10¢	5¢	5¢	¢
<u> </u> ¢	<u> </u> ¢	<u> </u> ¢	<u> </u> ¢	<u> </u> ¢	<u> </u> ¢	

					¢
<u> </u> ¢	<u> </u> ¢	<u> </u> ¢	<u> </u> ¢	<u> </u> ¢	







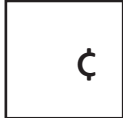
25¢	25¢	10¢	10¢	10¢	10¢	¢
<u> </u> ¢	<u> </u> ¢	<u> </u> ¢	<u> </u> ¢	<u> </u> ¢	<u> </u> ¢	

25¢	25¢	25¢	5¢	5¢	5¢	¢
<u> </u> ¢	<u> </u> ¢	<u> </u> ¢	<u> </u> ¢	<u> </u> ¢	<u> </u> ¢	







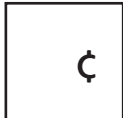
						¢
<u> </u> ¢	<u> </u> ¢	<u> </u> ¢	<u> </u> ¢	<u> </u> ¢	<u> </u> ¢	

COPYRIGHT © 2017 JUMP MATH: NOT TO BE COPIED







Count the money.








_____ ¢ _____ ¢ _____ ¢ _____ ¢ _____ ¢ _____ ¢








_____ ¢ _____ ¢ _____ ¢ _____ ¢ _____ ¢ _____ ¢








_____ ¢ _____ ¢ _____ ¢ _____ ¢ _____ ¢

_____ ¢ _____ ¢ _____ ¢ _____ ¢ _____ ¢ _____ ¢

_____ ¢ _____ ¢ _____ ¢ _____ ¢ _____ ¢ _____ ¢

_____ ¢ _____ ¢ _____ ¢ _____ ¢ _____ ¢ _____ ¢

COPYRIGHT © 2017 JUMP MATH: NOT TO BE COPIED

- Write the coin values from largest to smallest.
- Count the money.

Jake has 3 quarters and 2 dimes.
How many cents does he have?



Bonus

Sindi has 2 quarters, 3 dimes, and 2 nickels.
How much money does she have?